



## FRACTIONS 1 (BILINGÜE)

1) What fraction of the boxes are coloured in?

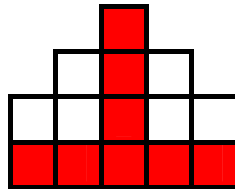
a)




b)



c)



d)



2) Work out these amounts:

a)  $\frac{2}{5}$  of £10

b)  $\frac{3}{4}$  of 3 kg

c)  $\frac{2}{7}$  of 14€

d)  $\frac{3}{4}$  of 2 km

3) Write the fractions in its lowest terms:

a)  $\frac{15}{20} =$

b)  $\frac{33}{22} =$

c)  $\frac{27}{99} =$

e)  $\frac{25}{30} =$

f)  $\frac{26}{39} =$

g)  $\frac{21}{35} =$

4) Divide each cross into the given fraction:

a) HALVES



b) QUARTERS



c) FIFTHS



d) EIGHTHS



5) Work out the value of x in each one of these:

a)  $\frac{18}{33} = \frac{24}{x}$

b)  $\frac{14}{49} = \frac{x}{14}$

6) I ate  $\frac{2}{5}$  of my 20 candies. How many do I have left?

7) Four kids have a pizza to share equally. What fraction of pizza did each kid get?

8) Lewis has 5 euros. This is only one-fourth of the money he had last week. How much did he have last week?

9) Mary has 21 crayons and she has to give  $\frac{2}{7}$  of them to Ben. How many crayons Ben got from Mary?


10) There were 540 students in a school. Friday was their trip day to the museum.  $\frac{2}{10}$  of the kids went by bus and  $\frac{1}{10}$  of the kids went by car. How many kids went by bus? How many kids went by car?

11) Write down these fractions: a)  $\frac{6}{13}$       b)  $\frac{1}{4}$       c)  $\frac{2}{5}$       d)  $\frac{5}{8}$

## SOLUTIONS

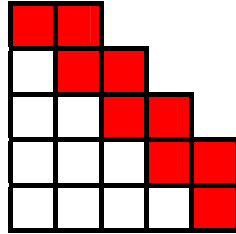
1) What fraction of the boxes are coloured in?

a)



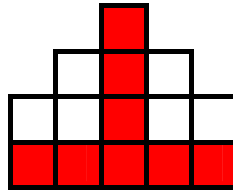
$$\frac{13}{25}$$

b)




$$\frac{9}{19}$$

c)



$$\frac{8}{14} = \frac{4}{7}$$

d)



$$\frac{16}{20} = \frac{4}{5}$$

2) Work out these amounts:

a)  $\frac{2}{5}$  of £10  $\rightarrow 10 \div 5 = 2 \rightarrow 2 \times 2 = 4 \rightarrow$  £4

b)  $\frac{3}{4}$  of 3 kg  $\rightarrow 3 \times 3 = 9 \rightarrow 9 \div 4 = 2.25 \rightarrow$  2.25kg

c)  $\frac{2}{7}$  of 14€  $\rightarrow 14 \div 7 = 2 \rightarrow 2 \times 2 = 4 \rightarrow$  4€

d)  $\frac{3}{4}$  of 2 km  $\rightarrow 3 \times 2 = 6 \rightarrow 6 \div 4 = 1.5$  km

3) Write the fractions in its lowest terms:

a)  $\frac{15}{20} = \frac{3}{4}$

b)  $\frac{33}{22} = \frac{3}{2}$

c)  $\frac{27}{99} = \frac{3}{11}$


e)  $\frac{25}{30} = \frac{5}{6}$

f)  $\frac{26}{39} = \frac{2}{3}$

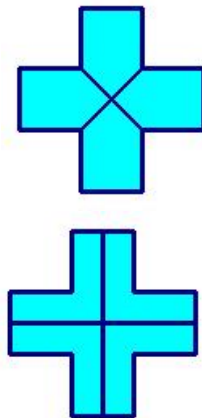
g)  $\frac{21}{35} = \frac{3}{5}$

4) Divide each cross into the given fraction:

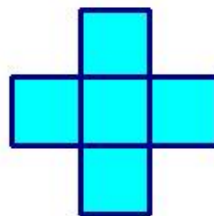
a) HALVES




b) QUARTERS



c) FIFTHS



d) EIGHTHS



5) Work out the value of x in each one of these:

a)  $\frac{18}{33} = \frac{24}{x} \rightarrow 18x = 33 \cdot 24 \rightarrow 18x = 792 \rightarrow x = 792 \div 18 \rightarrow x = 44$

b)  $\frac{14}{49} = \frac{x}{14} \rightarrow 14 \cdot 14 = 49x \rightarrow 49x = 196 \rightarrow x = 196 \div 49 \rightarrow x = 4$

6) I ate  $\frac{2}{5}$  of my 20 candies. How many do I have left?

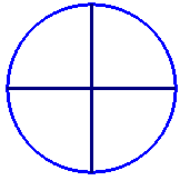
$\frac{2}{5}$  of 20  $\rightarrow 20 \div 5 = 4 \rightarrow 4 \times 2 = 8$

I ate 8 candies  $\rightarrow 20 - 8 = 12$

I have left 12 candies



7) Four kids have a pizza to share equally. What fraction of pizza did each kid get?



$\frac{1}{4}$  of pizza each kid got

8) Lewis has 5 euros. This is only one-fourth of the money he had last week. How much did he have last week?

$5 \times 4 = 20$

He had 20€ last week



9) Mary has 21 crayons and she has to give  $\frac{2}{7}$  of them to Ben. How many crayons Ben got from Mary?

$\frac{2}{7}$  of 21  $\rightarrow 21 \div 7 = 3 \rightarrow 3 \times 2 = 6$

Ben got 6 crayons from Mary



crayons

10) There were 540 students in a school. Friday was their trip day to the museum.  $\frac{2}{10}$  of the kids went by bus and  $\frac{1}{10}$  of the kids went by car. How many kids went by bus? How many kids went by car?

$\frac{2}{10}$  of 540 = 108    108 kids went by bus

$\frac{1}{10}$  of 540 = 54    54 kids went by car



11) Write down these fractions: a)  $\frac{6}{13}$  **six over thirteen, six thirteenths**

b)  $\frac{1}{4}$  **one over four, one quarter** c)  $\frac{2}{5}$  **two over five, two fifths**

d)  $\frac{5}{8}$  **five over eight, five eighths**