



LEE

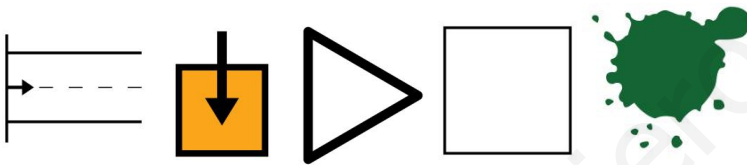
$$1 \quad \underline{+8} \quad \underline{-8}$$

$$2 \quad \underline{2}$$

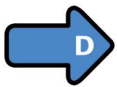
PRIMERO SUMA O RESTA



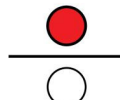
SEGUNDO PINTA EL CAMINO EN LA DIRECCIÓN QUE MARQUE



EMPIEZA EN EL CUADRADO VERDE



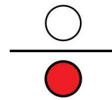
HACIA LA DERECHA



HACIA ARRIBA




HACIA LA IZQUIERDA




HACIA ABAJO

3



TERCERO RODEA LA COSA QUE VA A COMPRAR



1 ← I  $5 + 1 + 1 =$

4  $\frac{\bullet}{\circ}$   $67 - 47 =$

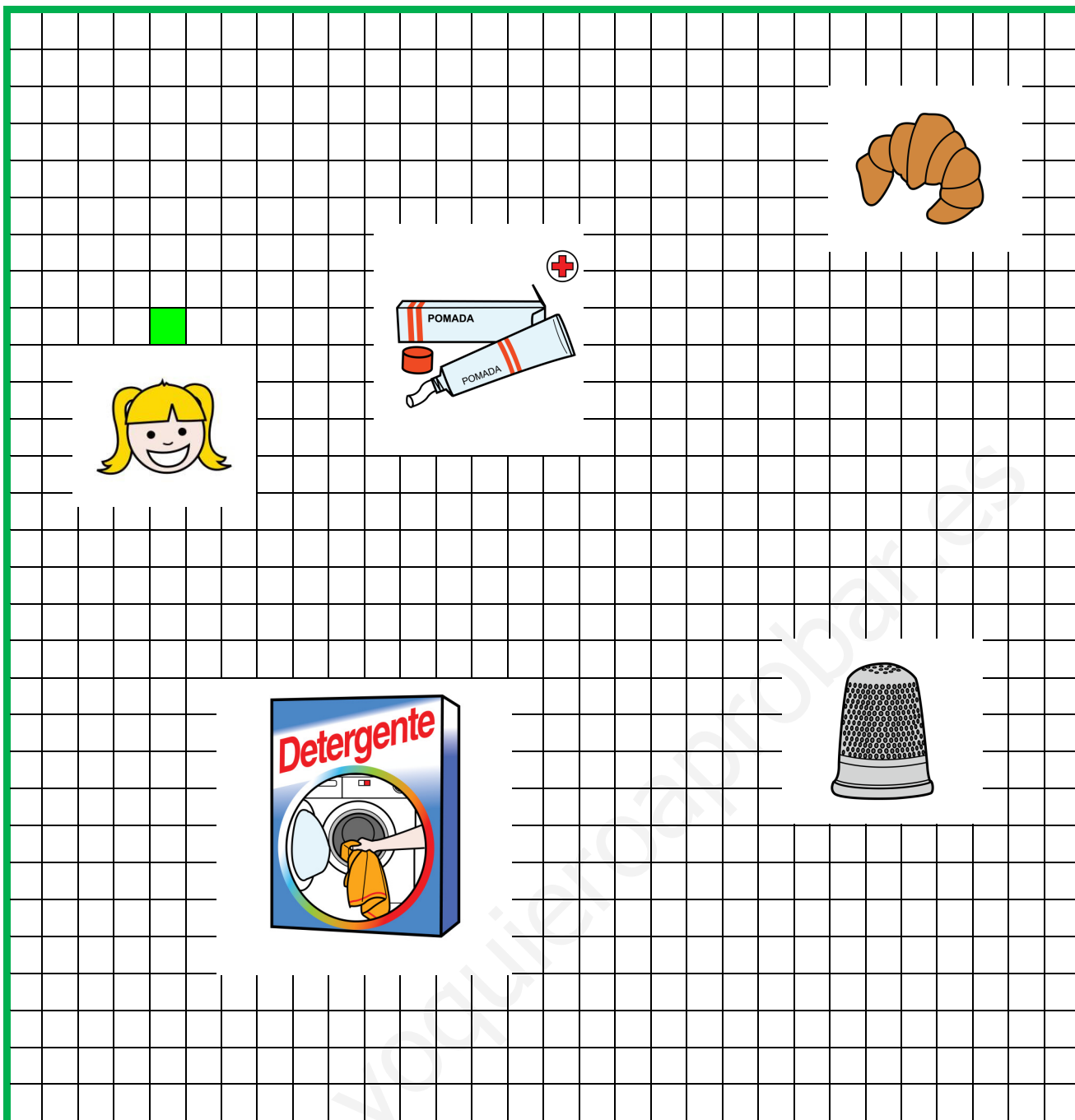
2  $\frac{\circ}{\bullet}$   $156 - 132 =$

5 ← I  $3 + 2 + 1 =$

3 → D  $5 + 5 =$

6  $\frac{\circ}{\bullet}$   $582 - 580 =$





1  $\frac{\bullet}{\circ}$   $189 - 183 =$

4  $\leftarrow$   $333 - 320 =$

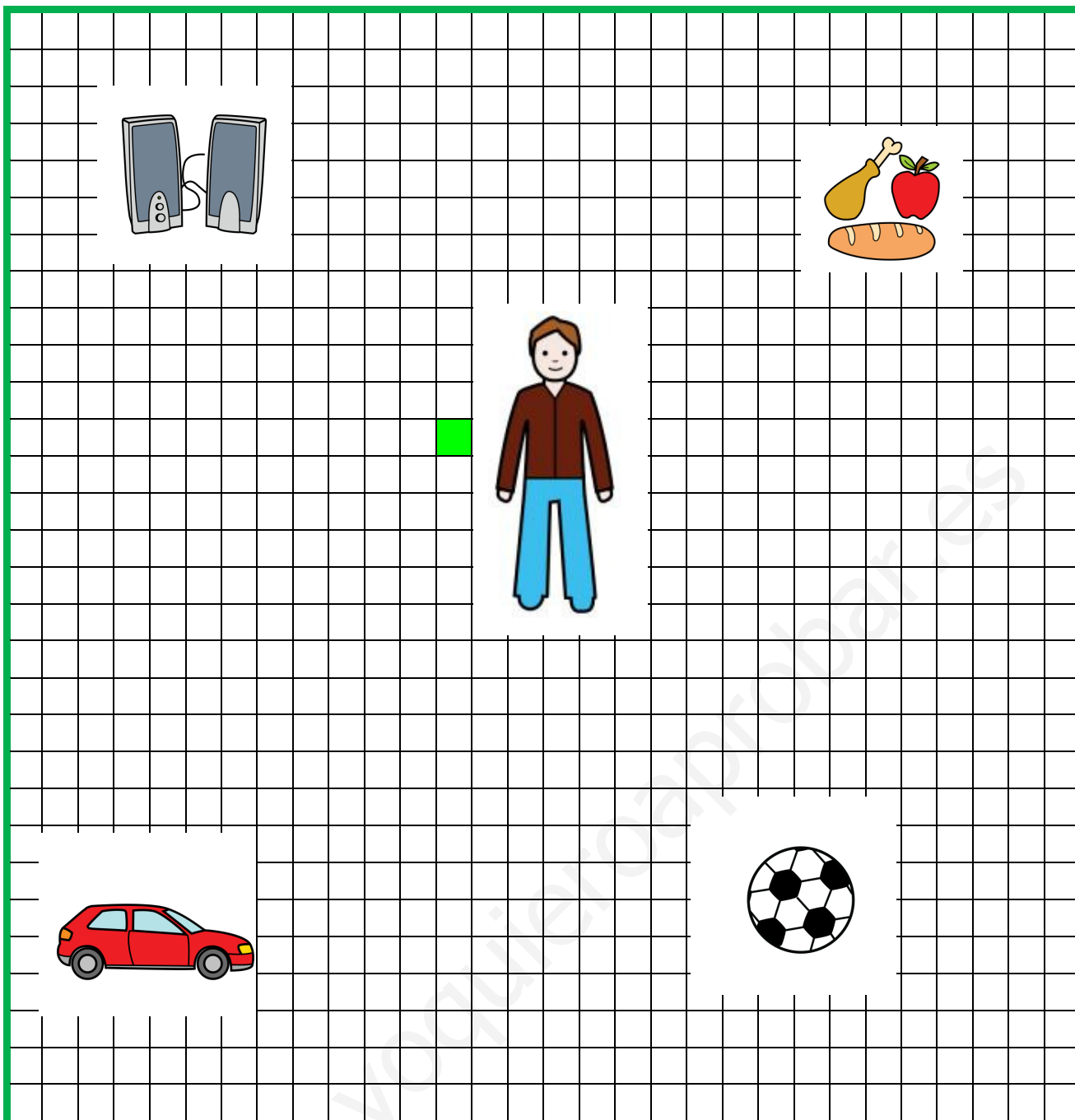
2  $\rightarrow$   $5 + 5 + 7 =$

5  $\frac{\bullet}{\circ}$   $4 + 3 + 3 =$

3  $\frac{\circ}{\bullet}$   $983 - 971 =$

6  $\rightarrow$   $546 - 532 =$





1 ← I  $2 + 4 + 2 =$

4  $\frac{\circ}{\bullet}$   $730 - 720 =$

2  $\frac{\circ}{\bullet}$   $987 - 980 =$

5 ← I  $5 + 10 + 8 =$

3 → D  $10 + 12 =$

6  $\frac{\bullet}{\circ}$   $75 - 74 =$

