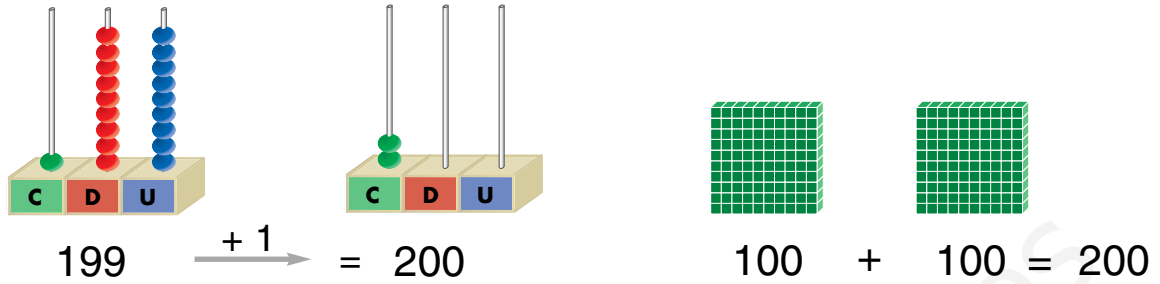





Números del 200 al 299

Aprende.



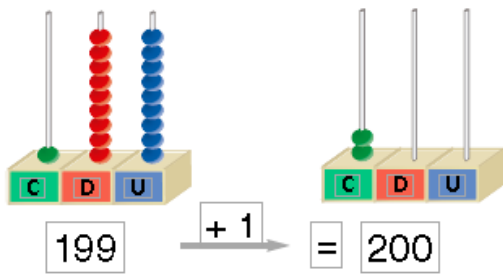


2 centenas = 20 decenas = 200 unidades
 2 C = 20 D = 200 U

Escribe con letra los números representados.



Aprende.

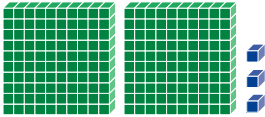


$$100 + 100 = 200$$

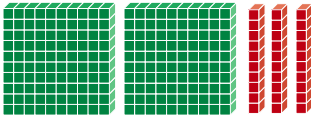
2 centenas = 20 decenas = 200 unidades

2 C = 20 D = 200 U

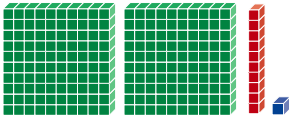
Escribe con letra los números representados.



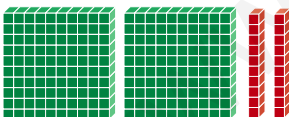
doscientos tres



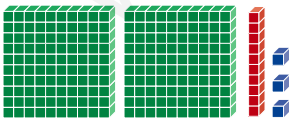
doscientos treinta



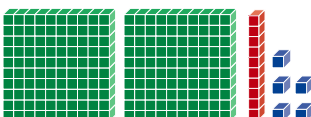
doscientos once



doscientos veinte

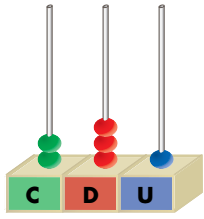


doscientos trece

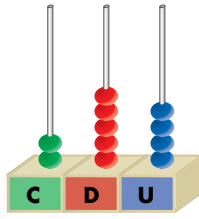


doscientos quince

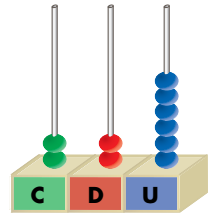
Escribe los números.



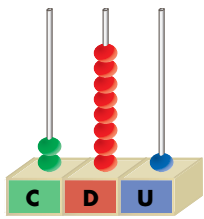
2	3	1
---	---	---



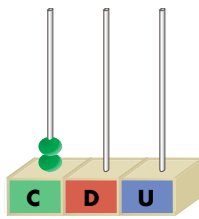
--	--	--



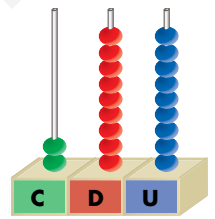
--	--	--



--	--	--



--	--	--



--	--	--

Escribe los números formados por:

2 C, 1 D y 3 U →

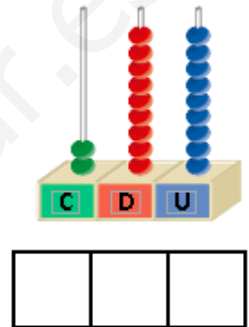
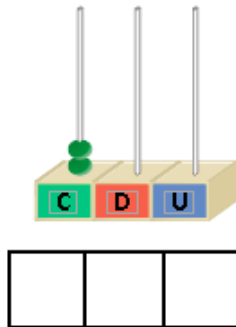
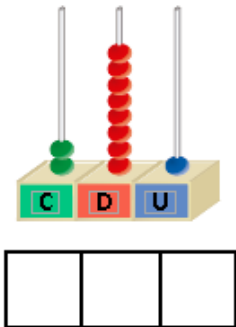
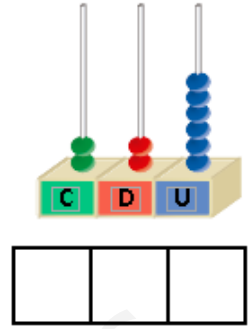
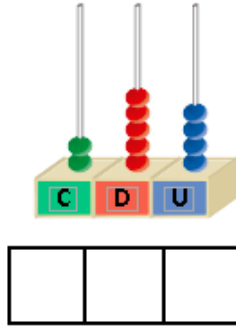
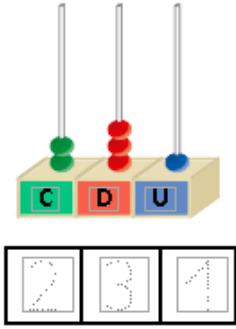
2 C y 6 U →

2 C y 3 D →

2 C y 8 U →

2 C y 4 D →

Escribe los números.



Escribe los números formados por:

2 C, 1 D y 3 U →

2 C y 6 U →

2 C y 3 D →

2 C y 8 U →

2 C y 4 D →