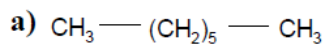
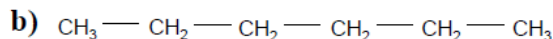


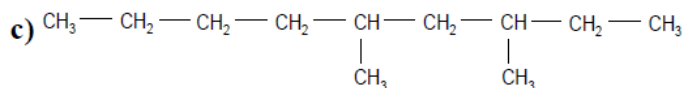
Nombra los siguientes hidrocarburos:



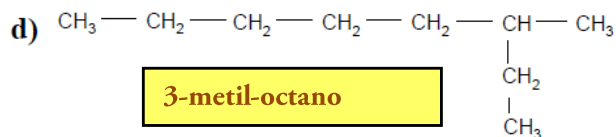
Heptano



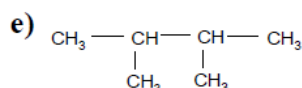
Hexano



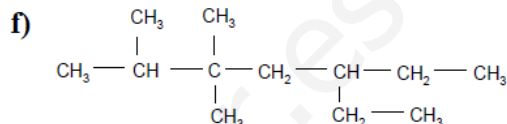
3,5-dimetil-nonano



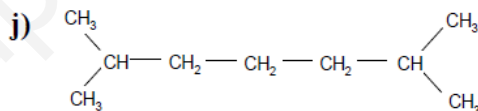
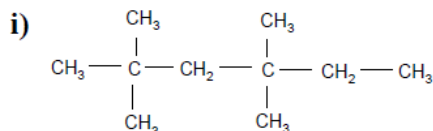
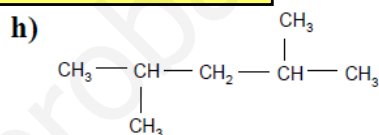
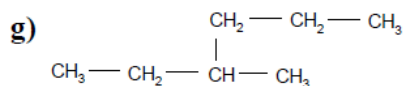
3-metil-octano



2,3-dimetil-propano



2-metil-3-dimetil-5-etilheptano



2. Formula los siguientes compuestos:

a) Dodecano

b) 2,2-dimetilbutano

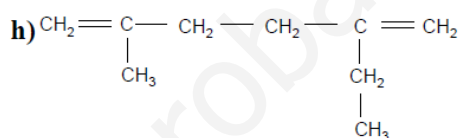
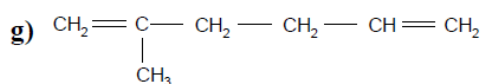
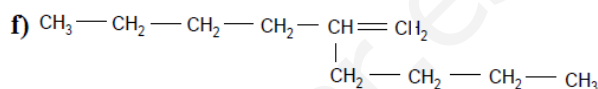
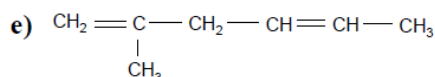
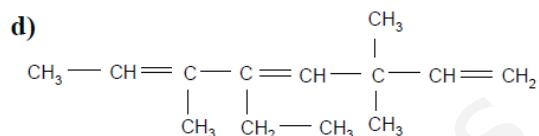
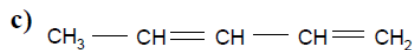
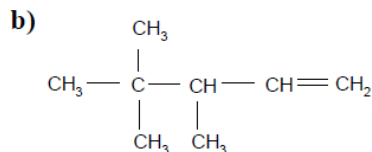
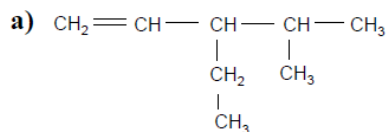
c) 3,5-dimetilheptano

d) 3-metilhexano

e) 2,3,4-trimetilpentano

f) 3,3,6-trietil-6-metiloctano

Nombra estos hidrocarburos:



Formula estos compuestos:

a) 3-hepteno

b) 1,3,6-heptatrieno

c) 3-propil-1-hepteno

d) 2-metil-1,4-hexadieno

e) 4,5-dimetil-2-hexeno

f) 4,6,8-trimetil-1,4,7-nonatrieno

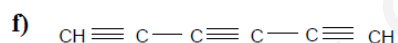
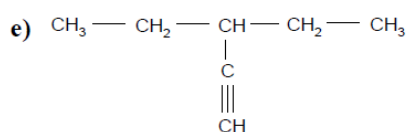
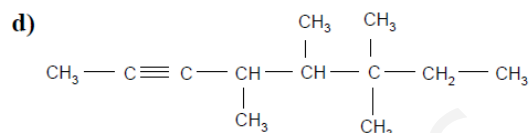
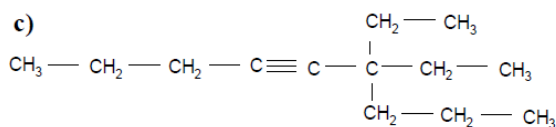
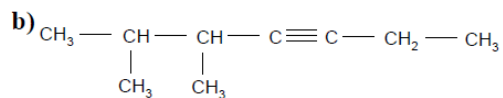
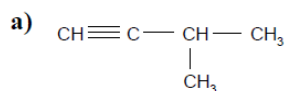
g) 3,3-dietil-1,4-hexadieno

h) 3,3,5-trimetil-1-hexeno

i) 3-etil-2,4-dimetil-3-hepteno

j) 2,3-dimetil-1-buteno

Nombra estos hidrocarburos:



Formula estos compuestos:

a) 2-pentino

b) 3-octino

c) 3-etil-4-metil-1,5-hexadiino

d) 7-metil-1,4,8-nonatriino

e) 2,5-heptadiino

f) 4-metil-5-propil-2,6-octadiino

g) 4-etil-3-metil-1,7-octadiino

h) 3-propil-1,5-heptadiino