





















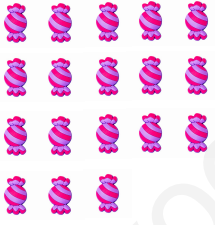



8 Completa las sumas

  $8 + 4 = \square$	  $5 + 9 = \square$
  $7 + 8 = \square$	  $9 + 9 = \square$









9 Completa las sumas

  $13 + 6 = \square$	  $5 + 11 = \square$
  $6 + 12 = \square$	  $16 + 5 = \square$

10 Completa las restas

 <p>$15 - 4 = \square$</p>	 <p>$17 - 5 = \square$</p>
 <p>$18 - 3 = \square$</p>	 <p>$19 - 6 = \square$</p>
 <p>$18 - 6 = \square$</p>	 <p>$15 - 4 = \square$</p>
 <p>$17 - 3 = \square$</p>	 <p>$19 - 9 = \square$</p>

11 Completa las restas

 <p>$13 - 10 = \square$</p>	 <p>$10 - 6 = \square$</p>
 <p>$10 - 4 = \square$</p>	 <p>$15 - 10 = \square$</p>
 <p>$13 - 6 = \square$</p>	 <p>$15 - 7 = \square$</p>
 <p>$11 - 7 = \square$</p>	 <p>$13 - 5 = \square$</p>

12 Empareja

$9 + 3$

$14 - 3$

$7 + 4$

$5 + 5$

$14 - 5$

9

10

11

12

13

$6 + 6$

$4 + 7$

$15 - 4$

$9 + 4$

$14 - 4$

13 Escribe dos sumas y dos restas en cada caso

a) 3, 8, 5

.....
.....

b) 10, 4, 6

.....
.....

14 Completa

$3 + \square = 6$

$1 + \square = 5$

$6 - \square = 4$


$2 + \square = 7$

$5 - \square = 2$

$7 - \square = 3$

15 Completa

a)

 $31 + 10 = \square$

b)

 $10 + 26 = \square$

c)

 $29 - 10 = \square$

d)

 $27 + 10 = \square$

16 Completa

$6 + 10 = \square$

$10 + 9 = \square$

$15 + 10 = \square$

$20 + 10 = \square$

$10 + 23 = \square$

$19 + 10 = \square$

$26 + 10 = \square$

$10 + 28 = \square$